





E-125  
Solange Arenas.

# MATEMÁTICA

## SEGUNDO B

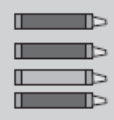

### Ejercitando la suma

Cuenta y suma los lápices. Sigue el modelo.


$$+ \quad \boxed{2}$$

$$+ \quad \boxed{4}$$

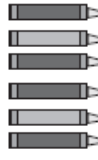

---

$$\boxed{6}$$


$$+ \quad \boxed{\phantom{00}}$$

$$+ \quad \boxed{\phantom{00}}$$



---

$$\boxed{\phantom{00}}$$


$$+ \quad \boxed{\phantom{00}}$$

$$+ \quad \boxed{\phantom{00}}$$



---

$$\boxed{\phantom{00}}$$


$$+ \quad \boxed{\phantom{00}}$$

$$+ \quad \boxed{\phantom{00}}$$



---

$$\boxed{\phantom{00}}$$


$$+ \quad \boxed{\phantom{00}}$$

$$+ \quad \boxed{\phantom{00}}$$

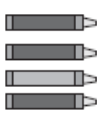

---

$$\boxed{\phantom{00}}$$


$$+ \quad \boxed{\phantom{00}}$$

$$+ \quad \boxed{\phantom{00}}$$



---

$$\boxed{\phantom{00}}$$


$$+ \quad \boxed{\phantom{00}}$$

$$+ \quad \boxed{\phantom{00}}$$



---

$$\boxed{\phantom{00}}$$


$$+ \quad \boxed{\phantom{00}}$$

$$+ \quad \boxed{\phantom{00}}$$

---

$$\boxed{\phantom{00}}$$


$$+ \quad \boxed{\phantom{00}}$$

$$+ \quad \boxed{\phantom{00}}$$

---

$$\boxed{\phantom{00}}$$